

Name

Date

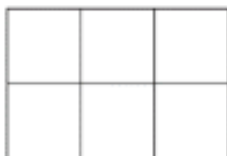


FRACTIONS OF SHAPES 4

Shade the correct fraction of each shape.

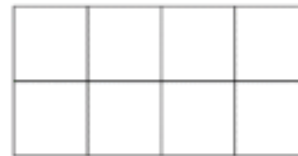
Remember $\frac{1}{4}$ means 1 *out of every* 4!

1)



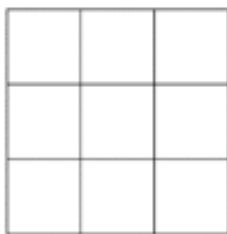
Shade $\frac{1}{2}$

2)



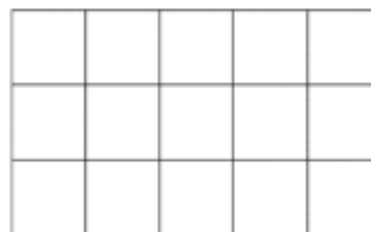
Shade $\frac{1}{4}$

3)



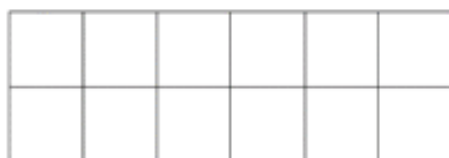
Shade $\frac{2}{3}$

4)



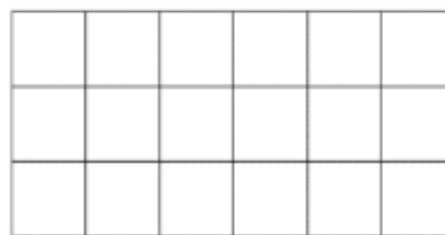
Shade $\frac{1}{3}$

5)



Shade $\frac{3}{4}$

6)




Shade $\frac{1}{6}$

7)



Shade $\frac{5}{12}$

8)



Shade $\frac{4}{5}$



Free Math Sheets, Math Games and Math Help

MATH-SALAMANDERS.COM